

HOWARD COUNTY 4-H HORSE AND PONY PROJECT
HORSEMANSHIP LEVEL 2 PRACTICE TEST

1. What should you do if your horse blows himself up (bloats) when you saddle him?

2. Name these tools. How, where, and why is each used?

a.




b.



c.




d.



e.



f.



3. What would you use to pick your horse's feet?

4. How often and why do you pick your horse's feet?

5. Match the description with the correct coat colors:

_____ A horse having a golden coat and flaxen mane and tail.

_____ A dark skinned horse with a dark brown to bright reddish or yellowish brown coat, with a black mane and tail, and normally black markings on the legs.

_____ A horse with gold to dark reddish brown coat, usually having a matching or slightly lighter or darker mane and tail, or sometimes with a flaxen colored mane and tail.

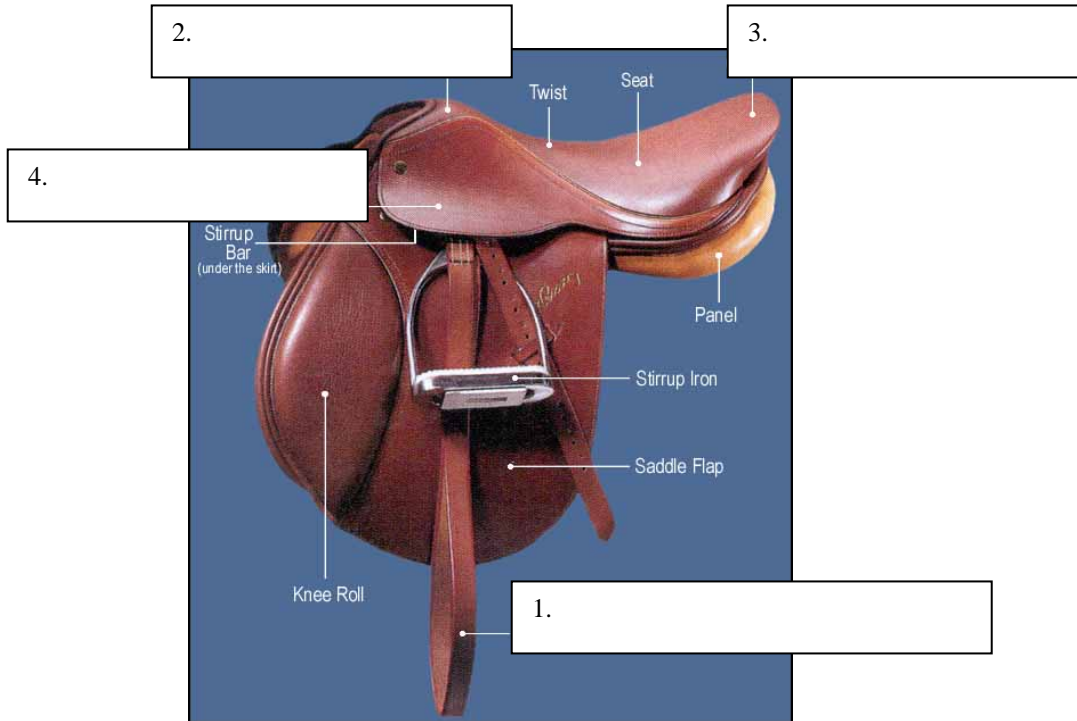
_____ A horse with a black coat, mane, and tail with no other color present, except possibly white markings on the face and/or the legs.

_____ A horse having a black, bay, or chestnut coat with a mixture of white hairs (especially on the body and neck), which modifies the color.

_____ A horse whose coat consists of large irregular and clearly defined patches of white and any color hairs.

- a. Chestnut
- b. Grey
- c. Roan
- d. Bay
- e. Pinto
- f. Palomino
- g. Black

6. Name four parts of the English saddle:



7. Name four bridle parts.

- a. _____
- b. _____
- c. _____
- d. _____